













Name _____

Each of these planes had three stops on their trip. How many passengers did they carry altogether?


$$\begin{array}{r} 63 \\ 27 \\ + 32 \\ \hline \end{array}$$

$$\begin{array}{r} 45 \\ 15 \\ + 55 \\ \hline \end{array}$$

$$\begin{array}{r} 36 \\ 74 \\ + 29 \\ \hline \end{array}$$

$$\begin{array}{r} 16 \\ 44 \\ + 19 \\ \hline \end{array}$$

$$\begin{array}{r} 79 \\ 50 \\ + 44 \\ \hline \end{array}$$

$$\begin{array}{r} 27 \\ 24 \\ + 93 \\ \hline \end{array}$$

$$\begin{array}{r} 51 \\ 62 \\ + 37 \\ \hline \end{array}$$

$$\begin{array}{r} 90 \\ 18 \\ + 25 \\ \hline \end{array}$$

$$\begin{array}{r} 23 \\ 31 \\ + 13 \\ \hline \end{array}$$

$$\begin{array}{r} 46 \\ 63 \\ + 21 \\ \hline \end{array}$$

$$\begin{array}{r} 60 \\ 54 \\ + 14 \\ \hline \end{array}$$

$$\begin{array}{r} 88 \\ 33 \\ + 12 \\ \hline \end{array}$$